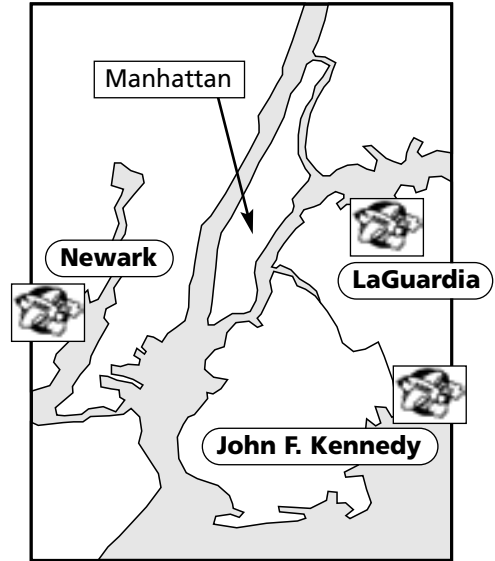





Arriving in New York City

Welcome to New York! There are three major airports in the New York City area: JFK, Newark Liberty and LaGuardia. International flights arrive at JFK and Newark.

1 The plane lands in New York. There are many signs. Where do you go first? Put these signs in order from 1-4.



2 You are at passport control. Where do you go?



3 You are leaving New York. Look at the list of departures. Answer the questions.


✈		Departures		✈	
Destination	Flight Time	Gate	Status*		
Boston 210	2:48 pm	12	Delayed		
Chicago 445	3:15 pm	22	Boarding		
Seattle 56	3:45 pm	19	Cancelled		
Los Angeles 13	4:10 pm	8	On time		

- a) You need to go to Chicago. Where do you go?
 Exit Gate 445 Customs Gates 15-30
- b) Your friend is going to Seattle. What is the flight status?
 On time Cancelled Boarding Delayed
- c) There is a flight leaving at ten past four. Where is it going?
 Seattle Los Angeles Chicago Boston



- 4 Most visitors to New York want to go to Manhattan, the centre of New York City. There are many ways to get to Manhattan from the airports. The transportation desk in the airport has information for tourists.

You have arrived at JFK. You want to go to Manhattan.
Look at the information and complete the table:



The fastest way to get to the subway and the cheapest way to get to Manhattan!

- ▶ Only \$7 one-way. [\$5 Enter/Exit Fare* + \$2 Subway Fare]
- ▶ Just take the **AirTrain** to the Howard Beach or Jamaica Subway stations.
- ▶ Then connect* to subway lines taking you anywhere in New York City.
- ▶ The **AirTrain** runs every 4-8 minutes from 6 am to 11 pm and every 12 minutes from 11 pm to 6 am.
- ▶ Travel time from JFK to mid-Manhattan is approximately 60-75 minutes.

Taxi

Why share the ride with anyone else? Take a taxi and enjoy fast, personal, door-to-door service whenever you want it.


Taxis are always available, 24 hours a day, every day. We can take you to your hotel in as little as 40 minutes. (Note: travel time may be longer at peak hours*.)

Just look for the taxi stands in front of the terminals. Flat rate \$45 plus tolls*.





New York Airport Service
Express Bus



- For a comfortable* trip to Manhattan from JFK, take the Express Bus.
- A one-way ticket on the bus to Manhattan costs \$13.00.
- No connections to make and plenty of room for all your luggage*!
- You can always find a bus ready to take you to town. They run every 15 - 30 minutes, from 6:15 am to 11:10 pm and travel time is only 45 - 65 minutes. (Note: travel time may be longer at peak hours.)

Transport	Cost?	How long?	How often?	Night service?
AirTrain				
Taxi				
Bus				

VOCABULARY CHECK LIST
What is it in your language?
Find out!

citizen

status

underground

single

fare

to connect

peak hours

toll

comfortable

luggage

\$
US-UK
rest rooms = toilets
subway = underground*
one-way = single*